



# MENTAL MATHS COMPETITION

: Organised by :

**GLOBAL MATHS SCIENCE EDUCATION®**

*in association with* **Math Vision PTE Ltd., Singapore**

## MOCK TEST

Name : \_\_\_\_\_

School : \_\_\_\_\_ Std. : **3**

Mob.No. : (Mother) \_\_\_\_\_ (Father) \_\_\_\_\_

**Total Marks : 100**

**Total No.of questions : 50**

1. Time : 1 hr
2. Students can use HB Pencil for marking answers in OMR sheet.
3. Questions are arranged according to 3 difficulty level to provide pupils with optimum exposure to Mental Maths.
4. [Section 1] In this section, there are 20 questions help to build calculation skills. Each question carries 1 mark.
5. [Section 2] It is related with 20 questions to test fundamental concept covered in topic listed below. Each question carries 2 marks.
6. [Section 3] Here questions are challenging & required high order thinking skills. Each question carries 4 marks. Students are requested to practice extra question given alongwith given two Mock papers in this booklet. Any 10 questions will be asked from given question format in mock paper & extra practice questions.

### Topics

- ◆ Addition & Subtraction (with carry over and borrowing)
- ◆ Multiplication & Division (Tables from 2 to 15)
- ◆ Number Names, Expanded form, ascending & descending order.
- ◆ Doubling and Halving of Numbers.
- ◆ Roman Numerals (1 to 300)
- ◆ Measurement conversions, kg, g, l, ml, cm, m (1 kg = 1000 g, 1m = 100 cm, 1ℓ = 1000 ml)
- ◆ Money (₹ to p and p to ₹) ₹ 1 = 100 p
- ◆ Time Hrs to mins } 1Hr = 60 mins  
Mins to seconds } 1 min = 60 seconds
- 1 week = 7 days
- 1 year = 365 days
- 1 day = 24 hours
- ◆ Geometry Angles (acute, obtuse, right, straight)  
Triangles, Square & Rectangles
- ◆ Concept of Fractions

## Mock Paper - 1 SECTION - 1

$$\begin{array}{r} 1. \quad 4 \ 5 \ 3 \\ + \ 2 \ 6 \ 7 \\ \hline \end{array}$$

- (a) 710 (b) 620  
(c) 702 (d) 720

$$\begin{array}{r} 2. \quad 6 \ 0 \ 3 \\ - \ 4 \ 8 \ 9 \\ \hline \end{array}$$

- (a) 115 (b) 114  
(c) 113 (d) 112

$$3. \quad 36 - \square = 19$$

- (a) 17 (b) 15  
(c) 16 (d) 18

$$4. \quad \square + 14 = 33$$

- (a) 18 (b) 17  
(c) 19 (d) 16

5. What comes next

$$111, 94, 77, 60, \square$$

- (a) 43 (b) 53  
(c) 33 (d) 47

6. What is next number

$$75, 94, 113, 132, \square$$

- (a) 141 (b) 151  
(c) 161 (d) 153

7. Find the missing digit.

$$\begin{array}{r} 8 \ 7 \ \square \\ - \ 4 \ 8 \ 7 \\ \hline 3 \ 8 \ 3 \end{array}$$

- (a) 1 (b) 2  
(c) 0 (d) 3

$$\begin{array}{r} 8. \quad \square \ 3 \ 7 \\ + \ 4 \ 3 \ 8 \\ \hline 9 \ 7 \ 5 \end{array}$$

- (a) 6 (b) 4  
(c) 3 (d) 5

$$9. \quad 15 \times 9 = \underline{\hspace{2cm}}$$

- (a) 120 (b) 125  
(c) 135 (d) 145

$$10. \quad 91 \div 13 = \underline{\hspace{2cm}}$$

- (a) 7 (b) 6  
(c) 8 (d) 5

$$\begin{array}{r} 11. \quad 8 \ 7 \\ \times \ 6 \\ \hline \hline \end{array}$$


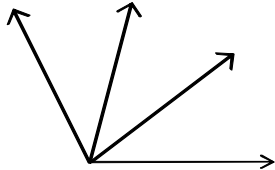
- (a) 532 (b) 522  
(c) 502 (d) 512

$$12. \quad 8 \times \square = 56$$

- (a) 7 (b) 6  
(c) 8 (d) 9

- 13.**  $60 \div \square = 5$   
(a) 10 (b) 11  
(c) 9 (d) 12
- 14.**  $689 = \square + 80 + 9$   
The missing number in the box is  
(a) 60 tens (b) 60 ones  
(c) 60 hundreds (d) 6 units
- 15.** Form largest 3 digit number by using the below digits only once  
3, 6, 0, 1, 9, 5, 4  
(a) 954 (b) 975  
(c) 965 (d) 109
- 16.** Form smallest 3 digit number by using the below digits only once  
0, 3, 8, 7, 4, 1, 9  
(a) 102 (b) 987  
(c) 013 (d) 103
- 17.** Which of the below is arranged in increasing order.  
(a) 249, 131, 389, 414  
(b) 323, 333, 343, 358  
(c) 627, 617, 607, 597  
(d) 419, 319, 409, 121
- 18.**  $(15 - 7) \times (19 - 5) = \underline{\hspace{2cm}}$   
(a) 112 (b) 102  
(c) 122 (d) 92
- 19.** [Double of 97] - 89 =           
(a) 104 (b) 105  
(c) 103 (d) 101
- 20.** Double of 84 - Half of 102 =           
(a) 117 (b) 115  
(c) 116 (d) 114

## SECTION - 2

- 21.** Thirteen tens more than 4 hundred & 4 ones = \_\_\_\_\_  
(a) 570 (b) 534  
(c) 524 (d) 544
- 22.**  $(66 \div 11) + 32 =$  \_\_\_\_\_ .  
(a) XXVIII (b) XXXVI  
(c) XXXVII (d) XXXVIII
- 23.**  $(14 \times 12) - 79 =$  \_\_\_\_\_ .  
(a) 85 (b) 79  
(c) 89 (d) 99
- 24.**  $LXX \div X + IX$   
(a) 17 (b) 15  
(c) 12 (d) 16
- 25.** 1700 cm = \_\_\_\_\_ m  
(a) 17 (b) 170  
(c) 17000 (d) None of these
- 26.** 7 km 378 m = \_\_\_\_\_ m .  
(a) 7873 (b) 7378  
(c) 7278 (d) 7478
- 27.** ₹18.45 = \_\_\_\_\_ paise  
(a) 1845 (b) 1855  
(c) 1835 (d) 1865
- 28.** 452 p = ₹ \_\_\_\_\_  
(a) 45.2 (b) 4.25  
(c) 4.62 (d) 4.52
- 29.** 4 years 4 months = \_\_\_\_\_ months  
(a) 48 (b) 24  
(c) 36 (d) 52
- 30.** Minute hand is pointing at 5 and hour hand between 3 and 4.  
(a) 3 : 20 (b) 5 : 15  
(c) 4 : 05 (d) 3 : 25
- 31.**  $8\frac{1}{4}$  hrs = \_\_\_\_\_ mins  
(a) 495 (b) 395  
(c) 825 (d) 485
- 32.** How many squares are there in   
(a) 6 (b) 9  
(c) 8 (d) 10
- 33.** How many angles are there in   
(a) 4 (b) 6  
(c) 8 (d) 5

34.  $\frac{3}{5} \square \frac{2}{3}$ , put the correct sign.

- (a) > (b) =  
 (c) < (d) None of these

35. Clock shows 2 : 00, what kind of angle is formed.

- (a) Right angle  
 (b) Acute angle  
 (c) Obtuse angle  
 (d) None of these

36. 

- (a)  (b)   
 (c)  (d) 

37.  $14\frac{1}{4} =$  \_\_\_\_\_ quarters

- (a) 55 (b) 56  
 (c) 57 (d) 58


38.  $89 - 45 =$  \_\_\_\_\_  $\times 11$ .

- (a) 3 (b) 4  
 (c) 2 (d) 5

39. 8 dozen = \_\_\_\_\_ units

- (a) 108 (b) 86  
 (c) 76 (d) 96

40.



Time is \_\_\_\_\_

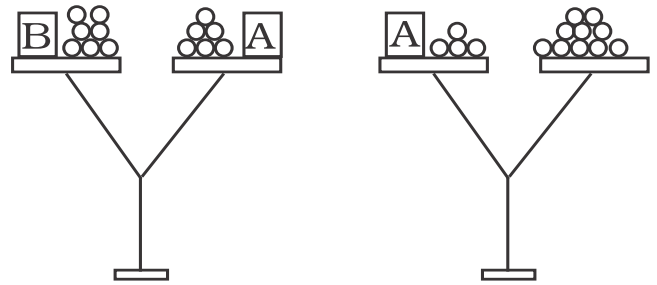
- (a) 9 : 15 hrs (b) 8 : 45 hrs  
 (c) 8 : 15 hrs (d) 3 : 40 hrs

**SECTION - 3**

41.

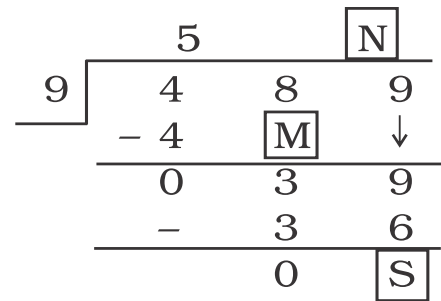
Weight of box 'B' is \_\_\_\_\_ units.

- (a) 4
- (b) 5
- (c) 6
- (d) 3



42. Find the value of  $M \times N + S$ .

- (a) 13
- (b) 33
- (c) 17
- (d) 23



43.  $127 + \boxed{A} = 199$ .

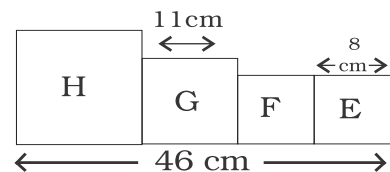
$\boxed{B} - 49 = 36$

Subtract A from B. The answer is \_\_\_\_\_

- (a) 13
- (b) 15
- (c) 23
- (d) 11

44. The figure is made up of 4 squares. Find the length of each side of 'H'.

- (a) 17 cm
- (b) 21 cm
- (c) 19 cm
- (d) 18 cm



45. Rishi sold 426 books on Friday. He sold 79 less books on Saturday than on Friday. How many books did he sell altogether on both days.

- (a) 931
- (b) 347
- (c) 773
- (d) 505

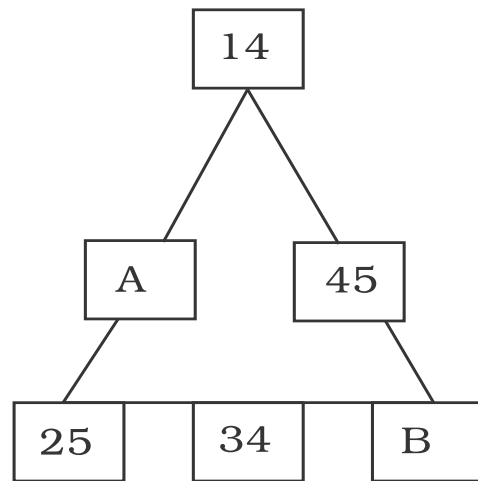
46. Ramesh attended a 'Maths show' which started at 7 : 45 pm and ended at 12 : 05 am. How long did the show last?

- (a) 4 hrs 20 mins
- (b) 4 hrs 15 mins
- (c) 4 hrs 25 mins
- (d) 4 hrs 5 mins

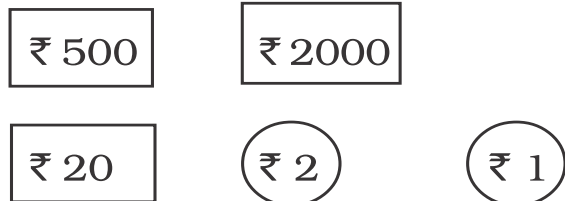
47. The number on each side of the triangle add upto 131 what is

$A + B$  ?

- (a) 174  
(b) 154  
(c) 164  
(d) None of these



48. Soham got the amount shown as his birthday gift. Which of the following options is not correct with respect to the amount shown here ?



- (a) Two thousand five hundred twenty three  
(b)  $2000 + 500 + 20 + 3$   
(c)  $2600 - 77$   
(d)  $2500 + 30 - 9$
49. Meena had a ribbon. She cut it into 14 equal pieces, each of length 11 cm. What was the original length of the ribbon ?
- (a) 144                      (b) 154                      (c) 164                      (d) 168
50. Suresh is standing in a queue. He is 33<sup>rd</sup> from the front and 69<sup>th</sup> from back. How many people are standing in the queue ?
- (a) 101                      (b) 102                      (c) 100                      (d) 99

## Mock Paper - 2 SECTION - 1

$$\begin{array}{r} 1. \quad 3 \ 4 \ 8 \\ + \ 4 \ 7 \ 9 \\ \hline \end{array}$$

- (a) 827 (b) 727  
(c) 837 (d) 872

$$\begin{array}{r} 2. \quad 9 \ 1 \ 3 \\ - \ 4 \ 9 \ 8 \\ \hline \end{array}$$

- (a) 405 (b) 315  
(c) 415 (d) 425

$$3. \quad 53 - \square = 29$$

- (a) 14 (b) 24  
(c) 34 (d) 26

$$4. \quad \square + 27 = 49$$

- (a) 24 (b) 12  
(c) 32 (d) 22

5. What comes next

$$127, 98, 69, 40, \square$$

- (a) 13 (b) 11  
(c) 9 (d) 10

6. What is next number

$$89, 126, 163, 200, \square$$

- (a) 273 (b) 239  
(c) 237 (d) 235

7. Find the missing digit.

$$\begin{array}{r} \square \ 6 \ 4 \\ - \ 3 \ 8 \ 7 \\ \hline 0 \ 7 \ 7 \end{array}$$

- (a) 4 (b) 5  
(c) 3 (d) 2

$$\begin{array}{r} 8. \quad 4 \ 9 \ 3 \\ + \ 3 \ \square \ 7 \\ \hline 8 \ 6 \ 0 \end{array}$$

- (a) 4 (b) 7  
(c) 6 (d) 5

$$9. \quad 12 \times 7 = \underline{\hspace{2cm}}$$

- (a) 84 (b) 108  
(c) 96 (d) 86

$$10. \quad 75 \div 5 = \underline{\hspace{2cm}}$$

- (a) 13 (b) 12  
(c) 14 (d) 15

$$\begin{array}{r} 11. \quad 6 \ 8 \\ \times \ 7 \\ \hline \hline \end{array}$$

- (a) 376 (b) 476  
(c) 276 (d) 478

$$12. \quad 9 \times \square = 72$$

- (a) 8 (b) 9  
(c) 7 (d) 6



13.  $64 \div \square = 8$

- (a) 6 (b) 7  
(c) 8 (d) 5

14.  $574 = 500 + \square + 4$

The missing number in the box is

- (a) 700 (b) 7 units  
(c) 700 tens (d) 70 ones

15. Form largest 3 digit number by using the below digits only once.

4, 6, 0, 3, 9, 1, 2

- (a) 963 (b) 954  
(c) 964 (d) 974

16. Form smallest 3 digit number by using the below digits only once.

9, 6, 1, 5, 4, 2, 3

- (a) 123 (b) 132  
(c) 103 (d) 124

17. Which of the below is arranged in decreasing order.

- (a) 384, 314, 391, 421  
(b) 386, 397, 481, 500  
(c) 601, 384, 208, 414  
(d) 424, 414, 391, 319

18.  $(18 - 9) \times (24 - 9) = \underline{\hspace{2cm}}$

- (a) 125 (b) 135  
(c) 140 (d) 145

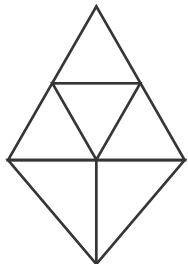
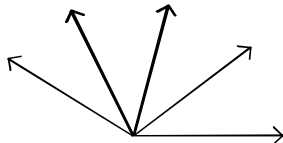
19. [Double of 108] - 117 =           

- (a) 99 (b) 89  
(c) 109 (d) 98

20. Double of 118 - Half of 120  
=           


- (a) 186 (b) 166  
(c) 176 (d) 156

## SECTION - 2

- 21.** Twenty five tens more than five hundred & forty ones = \_\_\_\_\_  
 (a) 790 (b) 890  
 (c) 780 (d) 719
- 22.**  $(98 \div 14) + 57 =$  \_\_\_\_\_ .  
 a) XLVI (b) LXIV  
 (c) XLIV (d) LXVI
- 23.**  $(13 \times 7) - 39 =$  \_\_\_\_\_ .  
 a) 53 (b) 42  
 (c) 62 (d) 52
- 24.**  $XC \div XV \times VIII$   
 (a) LXVIII (b) XLIX  
 (c) XLVIII (d) XLVII
- 25.** 1925 ml = \_\_\_\_\_ l  
 (a) 1.925 (b) 19.25  
 (c) 192.5 (d) 1925
- 26.** 6 kg 59 g = \_\_\_\_\_ g.  
 (a) 659 g (b) 6059g  
 (c) 6590 g (d) 6509 g
- 27.** 6449 p = ₹ \_\_\_\_\_  
 (a) 6449 (b) 6.449  
 (c) 64.49 (d) 644.9
- 28.** ₹ 89.09 = \_\_\_\_\_ paise  
 (a) 899 (b) 8990  
 (c) 8099 (d) 8909
- 29.** 8 years 9 months = \_\_\_\_\_ months  
 (a) 104 (b) 96  
 (c) 105 (d) 106
- 30.** Minute hand is pointing at 8 and hour hand between 5 and 6.  
 (a) 6 : 08 (b) 5 : 40  
 (c) 6 : 40 (d) 5 : 08
- 31.**  $11\frac{3}{4}$  hrs = \_\_\_\_\_ mins  
 (a) 705 (b) 505  
 (c) 605 (d) 1175
- 32.** How many triangles are there in  
 (a) 6  
 (b) 9  
 (c) 8  
 (d) 7
- 
- 33.** How many angles are there in ?
- 
- (a) 10 (b) 7  
 (c) 9 (d) 8
- 34.**  $\frac{4}{7} \square \frac{5}{11}$ , put the correct sign.  
 (a) < (b) >  
 (c) = (d) None of these

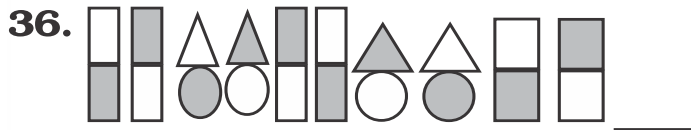
35. Clock shows 9 : 30, what kind of angle is formed.

- (a) Right angle
- (b) Acute angle
- (c) Straight angle
- (d) Obtuse angle



Time is \_\_\_\_\_

- (a) 2 : 45 hrs
- (b) 1 : 45 hrs
- (c) 2 : 09 hrs
- (d) 9 : 10 hrs



- (a)
- (b)
- (c)
- (d)

37.  $12\frac{1}{2} =$  \_\_\_\_\_ Quarters

- (a) 51
- (b) 48
- (c) 52
- (d) 50

38.  $156 \div 13 =$  \_\_\_\_\_  $\times 6$ .

- (a) 2
- (b) 3
- (c) 4
- (d) 1

39. 11 dozens = \_\_\_\_\_ units

- (a) 122
- (b) 142
- (c) 121
- (d) 132

## SECTION - 3

41. There are 247 potatoes in each sack. How many potatoes are there in 8 such sacks ?

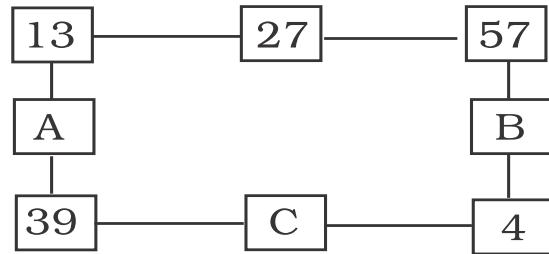
- (a) 1796                      (b) 1976                      (c) 1876                      (d) 1697

42. The number on each side of a rectangle add upto 97, find.

$$B + A - C = \underline{\hspace{2cm}}$$

- (a) 26                      (b) 81

- (c) 37                      (d) 27



43. 9 kg 750 g rice is equally distributed among 5 people. Find the share of each one.

- (a) 1 kg 950 g                      (b) 1 kg 095 g                      (c) 195 kg                      (d) 1 kg 850 g


44. The given figure is made up of \_\_\_\_\_ triangles \_\_\_\_\_ squares and \_\_\_\_\_ rectangles.

- (a) 6, 5, 4

- (b) 5, 1, 5

- (c) 5, 5, 5

- (d) 5, 4, 4



45. Misha saves ₹659 in January, ₹327 in February and ₹598 in March. How much she saved in these three months.

- (a) 1584                      (b) 1585                      (c) 1586                      (d) 1574

46. Sanju collects sticks from the jungle. He sells them in the market. He uses 14 sticks to make 1 bundle. How many sticks will **six** bundles have ?

- (a) 20                      (b) 60                      (c) 42                      (d) 84

47.  $\bigcirc + \triangle + \triangle + \triangle = 81$  ,  $\bigcirc + \bigcirc + \bigcirc + \square = 102$





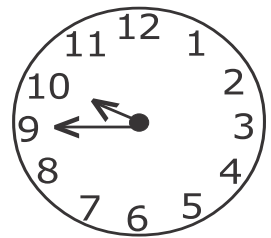
If  $\triangle = 24$ , then find  $\square$

- (a) 9 (b) 70 (c) 85 (d) 75

48. Rohit had 89 baseball cards, He sold 46 at a card show.  
Which of the given statement is true?

- (a) He sold more than half of his cards (b) He sold less than half of his cards  
(c) He sold exactly half of his cards (d) He sold one-fourth of his cards.

49. Study the clock face. Ansh spends 55 minutes painting his bed room wall and then 2 hours 30 minutes watching T.V, which of the below clock shows the time taken to finish his both activities?



50.  $483 \text{ g} + ? = 800 \text{ g} - 104 \text{ g}$ .  
The missing mass is \_\_\_\_ g.

- (a) 213 (b) 223 (c) 686 (d) 696

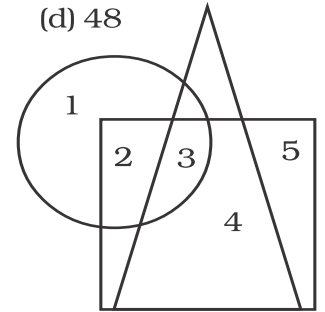
**Extra question for Practice (Section III)**

1. Deepa has 144 sweets. She has 3 times as many sweets as Chetna. How many sweets must Deepa give to Chetna so that both of them will have an equal number of sweets ?

- (a) 96 (b) 24 (c) 12 (d) 48

2. From the given figure, which number is in the square and in the circle but not in the triangle ?

- (a) 2 (b) 3  
(c) 4 (d) 5



3. Tina fills bowls with floating candels. The given table shows the relationship between the number of bowls she uses and the number of candels in bowls.

Use the pattern in the table, how many candels does Tina put in 9 bowls ?

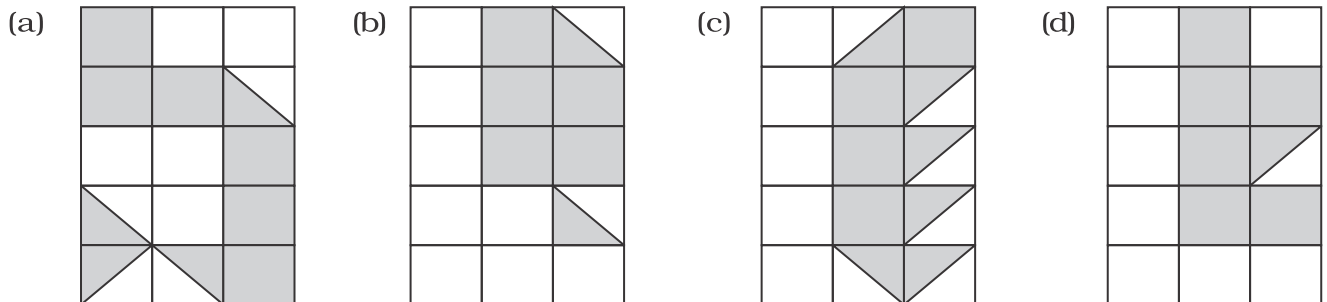
- (a) 50 (b) 54  
(c) 60 (d) 63

Floating Candels	
Number of bowls.	Number of Candels.
4	24
6	36
8	48
9	?

4. My Mom said, I could have all of the 50 paise coins and ₹1 coins in her wallet. It totals ₹15 . How many 50 paise and ₹1 coins do I have ?

- (a) 10, 10 (b) 5, 15 (c) 12, 6 (d) 15, 3

5. Which one of the shapes given below has the largest portion shaded ?

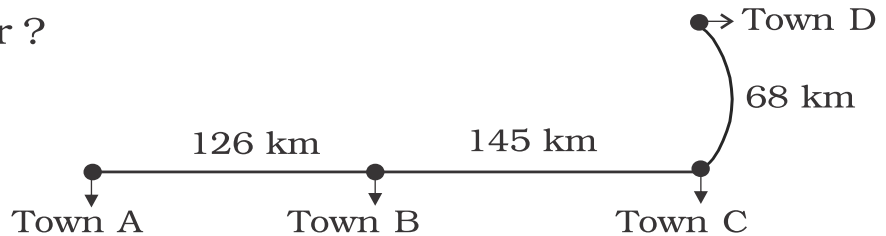


6. Raj has 36 minutes to make roti's. One roti takes 3 minutes. How many roti's can he make in this time ?

- (a) 39 (b) 108 (c) 33 (d) 12

7. A shopkeeper has 38 metres of red cloth. He sold some of the cloth and found 36 m 60 cm of cloth left. How much cloth did he sell ?  
 (a) 2 m 80 cm                      (b) 380 cm                      (c) 1 m 40 cm                      (d) 860 cm

8. Rinky travelled from Town D to Town B and Pinky travelled from Town C to Town A. Who Travelled a longer distance and how much more than the other ?



- (a) Rinky, 271 km                      (b) Pinky, 271 km                      (c) Rinky, 13 km                      (d) Pinky, 58 km
9. Chirag knows that 2 dogs are given 8 cups of food and 3 dogs are given 12 cups of food. How much food will be given to 5 dogs ?  
 (a) 15                                      (b) 16                                      (c) 20                                      (d) 25
10. There are 30 legs in my backyard, but I am counting dogs and kids. How many kids and dogs are in my backyard?  
 (a) 7 dogs, 1 kid                      (b) 6 dogs, 2 kids                      (c) 5 dogs, 3 kids                      (d) 4 dogs, 4 kids

11. The table below shows the postage rates for sending parcels to Australia. Find the postage for a parcel to be sent to Australia, which has a weight of 500 g ?

Weight	Rates
till 25g	₹ 0.50
till 50g	₹ 0.80
till 75g	₹ 1
till 100 g	₹ 1.20
Per additional 100 g	₹ 1

- (a) ₹ 5                                      (b) ₹ 4  
 (c) ₹ 2.50                                      (d) ₹ 5.20
12. The length of the rope is 511 m. If its cut into 7 equal pieces, find the length of each rope ?  
 (a) 49 m                                      (b) 37 m                                      (c) 83 m                                      (d) 73 m
13. Ramesh deposited ₹3525. Suresh deposited ₹175 more than Ramesh. Find total amount deposited in the bank.  
 (a) ₹ 3700                                      (b) ₹ 7225                                      (c) ₹ 7235                                      (d) ₹ 8225





- 21.** The entry fees for a circus was ₹140 for an adult and ₹ 70 for a child. Mr. Dev paid ₹700 and got back ₹140. If they were five people, what could be the combination ?
- (a) 4 adult, 1 child      (b) 3 adult, 2 child      (c) 5 adult, 0 child      (d) 0 adult, 5 child
- 22.** A boy has collected 120 coins of 50 paise. He wants to exchange these coins for ₹5 coins. How many ₹5 coins would he get ?
- (a) 12                      (b) 10                      (c) 14                      (d) 8
- 23.** Hockey tournament began on 26<sup>th</sup> March 2017 and ended on 19<sup>th</sup> April, 2017. Including both the days, for how many days did the tournament last for ?
- (a) 25 days                      (b) 23 days                      (c) 27 days                      (d) 24 days
- 24.** A rat fell in a well. In the first hour the rat climbed up 28 metres but slid down 8 metres. In the second hour the rat climbed 23 metres but slid by 9 metres. In the third hour the rat climbed up 19 metres without sliding. How deep was the well ?
- (a) 55 metres                      (b) 63 metres                      (c) 43 metres                      (d) 53 metres
- 25.** When 445 is divided by 12, the quotient and the remainder are which of the following ?
- (a) Q = 38, R = 1      (b) Q = 37, R = 1      (c) Q = 37, R = 2      (d) Q = 38, R = 2
- 26.** A train travelled a distance of 165 km from station 'P' to 'Q' and 224 km from 'Q' to 'R'. If the distance from 'P' to 'S' is 550 km, how much is the distance from 'R' to 'S'?
- (a) 163 km                      (b) 171 km                      (c) 161 km                      (d) 151 km
- 27.** A show ends at 2 : 15 p.m. If the time is 10 : 35 am. How much time is left for the show to end ?
- (a) 2 hrs 15 mins      (b) 3 hrs 45 mins      (c) 4 hrs 20 mins      (d) 3 hrs 40 mins

28. I have 5 notes. The total value of my money is ₹40. Here are 2 notes, which can be my three missing notes ?



(a)



(b)



(c)



(d)



29. [9 hundreds and 1 tens] – [2 hundreds and 50 ones] = [6 hundreds ‘X’ units]. Then value of ‘X’ is \_\_\_\_\_ ?

(a) 6

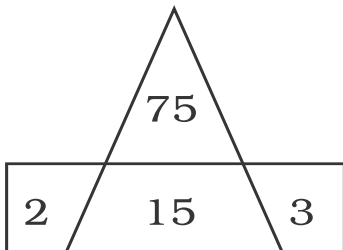
(b) 660

(c) 60

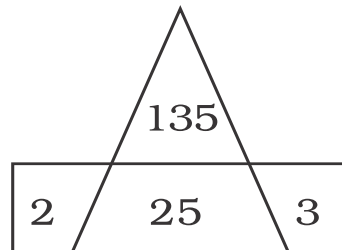
(d) 60 tens

30. Find the odd one out ?

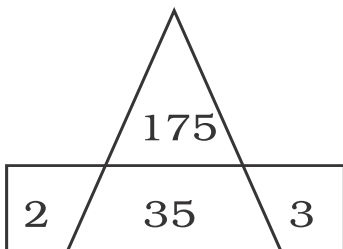
(a)



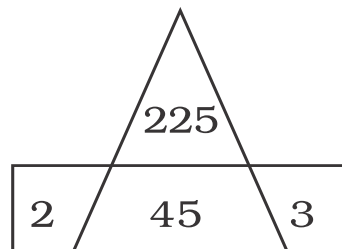
(b)



(c)



(d)



**Answer Sheet****Mock paper - 1**

1	d	2	b	3	a	4	c	5	a	6	b	7	c	8	d	9	c	10	a
11	b	12	a	13	d	14	a	15	c	16	d	17	b	18	a	19	b	20	a
21	b	22	d	23	c	24	d	25	a	26	b	27	a	28	d	29	d	30	d
31	a	32	c	33	b	34	c	35	b	36	a	37	c	38	b	39	d	40	c
41	b	42	d	43	a	44	c	45	c	46	a	47	c	48	d	49	b	50	a

**Mock paper - 2**

1	a	2	c	3	b	4	d	5	b	6	c	7	a	8	c	9	a	10	d
11	b	12	a	13	c	14	d	15	c	16	a	17	d	18	b	19	a	20	c
21	a	22	b	23	d	24	c	25	a	26	b	27	c	28	d	29	c	30	b
31	a	32	c	33	a	34	b	35	d	36	c	37	d	38	a	39	d	40	b
41	b	42	d	43	a	44	c	45	a	46	d	47	d	48	a	49	b	50	a

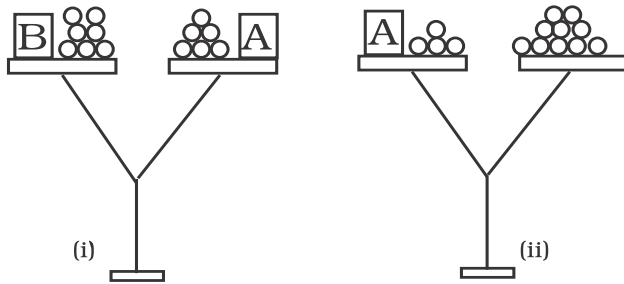
**Extra Practice Question Paper  
(Section - 3)**

1	d	2	a	3	b	4	a	5	a	6	d	7	c	8	d	9	c	10	a
11	d	12	d	13	b	14	b	15	c	16	d	17	a	18	b	19	c	20	b
21	b	22	a	23	a	24	d	25	b	26	c	27	d	28	a	29	c	30	b

**SECTION 3 (Solutions)**

**Mock Paper - 1**

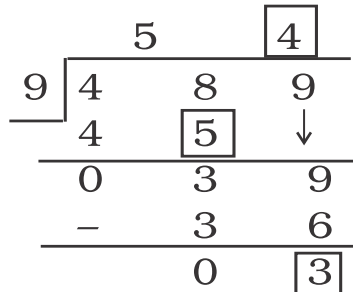
41)



From fig (ii),  
 $A + 4 \text{ units} = 10 \text{ units}$   
 $\therefore A = 10 - 4 = 6 \text{ units}$   
 Also, from figure (i)  
 $B + 7 = 6 + A$   
 $\therefore B + 7 = 6 + 6$  (put value of A)  
 $\therefore B + 7 = 12$   
 $\therefore B = 12 - 7$   
 $\therefore B = 5 \text{ units}$

42)

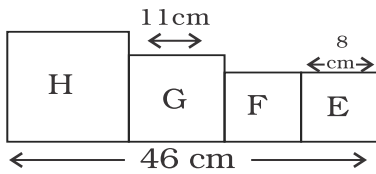
$M \times N + S$   
 $= 5 \times 4 + 3$   
 $= 20 + 3$   
 $= 23$



43)

$127 + \boxed{A} = 199$   
 $\therefore A = 199 - 127 = 72$   
 $\boxed{B} - 49 = 36$   
 $\therefore B = 36 + 49 = 85$   
 Now, subtract A from B =  $B - A$   
 $= 85 - 72 = 13$

44)



Squares all sides are equal  
 $\therefore$  whole one side of squares E, F, G, H is 46 cm  
 Sum of one side of squares E, F, G is ,  
 $8 + 8 + 11 = 27 \text{ cm}$   
 Now, side of square H  
 $= 46 - 27 = 19 \text{ cm}$

45)

Books sold on Friday = 426  
 Books sold on Saturday =  $426 - 79$   
 $= 347$   
 Total books sold on both days =  $426 + 347$   
 $= 773$

46)

Count the number of hours from 7 : 45 pm to 12 : 05 am  
 So,  $07 : 45 - 08 : 45$   
 $08 : 45 - 09 : 45$   
 $09 : 45 - 10 : 45$   
 $10 : 45 - 11 : 45$  } 4 Hrs  
 $11 : 45 - 12 : 05$  } 20 mins  
 its 4 hrs 20 mins

47)

Each side of triangle add up to 131 so,  
 $A = 131 - (14 + 25) = 131 - 39 = 92$   
 $B = 131 - (25 + 34) = 131 - 59 = 72$   
 $\therefore A + B = 92 + 72 = 164$

48)

Total amount = ₹2523 and the correct answer is option (d), as the amount doesn't come to 2523

49)

She cut into 14 equal pieces  
 Each piece length = 11 cm  
 $\therefore$  original length =  $14 \times 11$   
 $= 154 \text{ cm}$

50)

Suresh is 33<sup>rd</sup> from front and 69<sup>th</sup> from back.  
 $\therefore$  Number of people in a queue =  $(33 + 69) - 1$   
 $= 101$

**Mock Paper - 2**

41)

Potatoes in each sack = 247  
 Potatoes in 8 sacks =  $247 \times 8$   
 $= 1976$

42)

Each side of Rectangle add upto 97  
 $\therefore A = 97 - (13 + 39) = 45$   
 $B = 97 - (57 + 4) = 36$   
 $C = 97 - (39 + 4) = 54$   
 $\therefore B + A - C$   
 $= 36 + 45 - 54$   
 $= 27$

43)

Total weight of rice = 9 kg 750 g  
 Number of people = 5  
 $\therefore$  Each share =  $9750 \text{ g} \div 5$   
 $= 1950 \text{ g}$   
 $= 1 \text{ kg } 950 \text{ g}$

44)

5 triangles, 5 squares and 5 rectangles.

45)

Savings in January = 659  
 Savings in February = + 327  
 Savings in March = + 598  
 Total savings = 1584

46)

One bundle = 14 sticks  
 $\therefore$  6 bundles =  $14 \times 6$   
 $= 84$

47)  $\Delta = 24$   
 $\bigcirc + \Delta + \Delta + \Delta = 81$   
 $\bigcirc + 24 + 24 + 24 = 81$   
 $\bigcirc + 72 = 81$   
 $\bigcirc = 81 - 72 = 9$   
 Now,  $\bigcirc + \bigcirc + \bigcirc + \square = 102$   
 $9 + 9 + 9 + \square = 102$   
 $\therefore 27 + \square = 102$   
 $\therefore \square = 102 - 27 = 75$   
 $\therefore \square = 75$

48) Option (a) is correct  
 He sold more than half of his cards.

49) Total time Ansh spend on painting and watching T.V  
 $= 2 \text{ hrs } 30 \text{ mins}$   
 $+ \quad \quad \quad 55 \text{ mins}$   
 $\hline 2 \text{ hrs } 85 \text{ mins}$   
 so, its 3 hrs 25 mins  
 (1 hr = 60 mins)  
 He started at 9:45  
 $09 : 45 - 10 : 45$   
 $10 : 45 - 11 : 45$   
 $11 : 45 - 12 : 45$   
 $12 : 45 - 01 : 10$  } 3 hrs  
 } 25 mins  
 so, he will finish at 1 : 10

50)  $483g + ? = 800g - 104g$   
 $483g + ? = 696g$   
 $\therefore ? = 696g - 483g$   
 $= 213g$

**Extra Practice Questions**

- 1) Total sweets Deepa has = 144  
 Total sweets Chetna has =  $\frac{144}{3} = 48$   
 Difference between sweets with Deepa and Chetna =  $144 - 48 = 96$   
 Now,  $96 \div 2 = 48$   
 $\therefore$  Deepa needs to give 48 sweets to Chetna to make equal sweets with both of them.
- 2) Number '2' is in the square and in the circle but not in the triangle.
- 3) Its a pattern, multiply by 6  
 $4 \times 6 = 24$   
 $6 \times 6 = 36$   
 $8 \times 6 = 48$   
 $9 \times 6 = 54$   
 correct answer is 54
- 4)  $50 \text{ paise} \times 10 = 500 \text{ paise}$   
 $(\text{₹}1 = 100 \text{ p}) = \text{₹} 5$   
 $\text{₹}1 \times 10 = \text{₹}10$   
 Total = ₹15  
 $\therefore$  Ten 50 p coins & Ten ₹1 coins
- 5) option (a) is correct, it has 16 parts shaded.

6) Total minutes to make rotis = 36  
 Time taken to make 1 roti = 3 mins  
 $\therefore$  Number of rotis made in 36 mins  
 $= 36 \div 3 = 12$

7) Total length of cloth = 38 m  
 length of cloth left = 36 m 60 cm  
 length of cloth sold = 38 m - 36 m 60 cm

m	cm	
7	10	
38	00	
-	36	60
01	40	

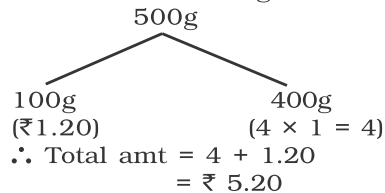
Answer = 1 m 40 cm

8) Rinky Town D to Town B  
 $= 68 \text{ km} + 145 \text{ km} = 213 \text{ km}$   
 Pinky  $\rightarrow$  Town C to Town A  
 $= 145 \text{ km} + 126 \text{ km} = 271 \text{ km}$   
 Pinky travelled longer distance by  $(271 - 213)$   
 $= 58 \text{ km}$

9) 2 dogs given 8 cups of food ( $2 \times 4 = 8$ )  
 3 dogs given 12 cups of food ( $3 \times 4 = 12$ )  
 5 dogs will be given 20 cups of food ( $5 \times 4 = 20$ )

10) 7 dogs =  $7 \times 4 = 28$  legs  
 1 kid =  $1 \times 2 = 2$  legs  
 Total = 30 legs


11) Total weight of parcel = 500g  
 Till 100g its ₹1.20  
 Per additional 100g = ₹1



12) Total length of rope = 511 m  
 Number of equal pieces = 7  
 Length of each piece =  $511 \div 7$   
 $= 73 \text{ m}$

13) Amount Ramesh deposited = ₹ 3525  
 Amount Suresh deposited =  $3525 + 175$   
 $= 3700$   
 $\therefore$  Total amount deposited by both  
 $= 3700 + 3525 = 7225$


14) Minute hand on XII and hour hand on IV



15) Greatest 3 digit number = 942  
 Smallest 3 digit number = 204  
 Their difference = 738

- 16) ☺ means 5 balloons  
 $\therefore$  Number of symbols for 60 balloons  
 $= 60 \div 5 = 12$
- 17) Total number of parts means the denominator (9)  
 white roses =  $\frac{4}{9}$   
 Red roses =  $\frac{2}{9}$   
 so, total of white and red roses =  $\frac{4}{9} + \frac{2}{9} + \frac{6}{9}$   
 means, out of 9 parts, 6 parts are white and red roses, so yellow roses =  $9 - 6 = 3$   
 $= \frac{3}{9}$  part.
- 18) its a pattern ....  
 $3 \times 5 = 15$   
 $0 \times 5 = 0$   
 $7 \times 5 = 35$   
 $12 \times 5 = 60$   
 answer is 12
- 19) Number 14 is put in machine.  
 multiply by 5 =  $14 \times 5 = 70$   
 Now, add 26 =  $70 + 26 = 96$   
 Now, subtract 39 =  $96 - 39 = 57$   
 Number 57 will come out of machine.
- 20) 'A' is standing on XXIX step = 29<sup>th</sup> step  
 'B' is standing on XVII step = 17<sup>th</sup> step  
 Number of steps between them =  $(29 - 17) - 1$   
 $= 12 - 1 = 11$  steps (XI)
- 21) Entry fees for an adult = ₹140  
 Entry fees for a child = ₹70  
 Mr. Dev paid ₹700 and got back ₹140,  
 Means total cost of tickets is ₹560 ( $700 - 140$ )  
 $3 \text{ adults} = 3 \times 140 = 420$   
 $2 \text{ child} = 2 \times 70 = 140$   
 Total cost = 560  
 $\therefore$  combination of 5 people is 3 adult and 2 child
- 22) Total money boy has  
 $= 120 \text{ coins} \times 50 \text{ paise}$   
 $= 6000 \text{ paise}$   
 $= ₹60$  (₹1 = 100 p)  
 $\therefore$  Number of ₹5 coins =  $\frac{60}{5} = 12$
- 23) Hockey tournament started on 26<sup>th</sup> March 2017,  
 and ended on 19<sup>th</sup> April, 2017  
 Now, count days from 26<sup>th</sup> March to 19<sup>th</sup> April  
 $= 25$  days
- 24) First hour =  $28 - 8 = 20$   
 second hour =  $20 + 23 - 9$   
 $= 43 - 9 = 34$   
 Third hour =  $34 + 19$   
 $= 53$  meters
- 25) Quotient = 37  
 Remainder = 1

$$\begin{array}{r} 37 \\ 12 \overline{) 445} \\ \underline{-36} \\ 085 \\ \underline{-84} \\ 01 \end{array}$$

- 26)   
 $500 \text{ km}$   
 Distance from P to R =  $165 + 224 = 389$   
 $\therefore$  Distance from R to S = PS - PR  
 $= 550 - 389 = 161 \text{ km}$
- 27) Actual current time = 10 : 35 am  
 show ends at 2 : 15 pm  
 $\therefore$  count time from 10:35 am to 2:15 pm  
 $10 : 35 - 11 : 35$  }  
 $11 : 35 - 12 : 35$  } 3 hours  
 $12 : 35 - 01 : 35$  }  
 $01 : 35 - 02 : 15$  } 40 mins  
 $\therefore$  answer is 3 hrs 40 mins
- 28) Total notes with me = 5  
 Total value of money = ₹40  
 Given two notes are two ₹5 notes, with both value taken together is ₹10.  
 so, i need 3 more notes whose value should be ₹ 30  
 correct answer is option (a)
- 29)  $910 - 250 = 600 + x$   
 $\therefore 910 - 250 = 660$   
 $\therefore 910 - 250 = 600 + 60$   
 $\therefore$  value of x = 60
- 30) Its a pattern  
 a)  $2 + 3 = 5$   
 $\therefore 15 \times 5 = 75$   
 b)  $2 + 3 = 5$   
 $\therefore 25 \times 5 = 125$   
 c)  $2 + 3 = 5$   
 $\therefore 35 \times 5 = 175$   
 d)  $2 + 3 = 5$   
 $\therefore 45 \times 5 = 225$   
 option (b) is the odd one out.



# MENTAL MATHS COMPETITION<sup>®</sup>

Name of Student in Full (IN CAPITAL LETTERS) :-

Name \_\_\_\_\_ Father's Name \_\_\_\_\_ Surname \_\_\_\_\_

School Name \_\_\_\_\_

Std. \_\_\_\_\_ Mobile No. \_\_\_\_\_

Examination Centre \_\_\_\_\_ Date : \_\_\_\_\_

### INSTRUCTIONS

1. Use HB Pencil only on this sheet
2. Darken the ovals fully.
3. Erase completely to change responses.
4. Do not make any stray mark on this sheet.

Incorrect way of shading

(A) (B) (C) (D)

(A) (B) (C) (D)

(A) (B) (C) (D)

Correct way of shading

(A) (B) (C) (D)

## ANSWERS

### Section - I

1. (A) (B) (C) (D)

2. (A) (B) (C) (D)

3. (A) (B) (C) (D)

4. (A) (B) (C) (D)

5. (A) (B) (C) (D)

6. (A) (B) (C) (D)

7. (A) (B) (C) (D)

8. (A) (B) (C) (D)

9. (A) (B) (C) (D)

10. (A) (B) (C) (D)

11. (A) (B) (C) (D)

12. (A) (B) (C) (D)

13. (A) (B) (C) (D)

14. (A) (B) (C) (D)

15. (A) (B) (C) (D)

16. (A) (B) (C) (D)

17. (A) (B) (C) (D)

18. (A) (B) (C) (D)

19. (A) (B) (C) (D)

20. (A) (B) (C) (D)

### Section - II

21. (A) (B) (C) (D)

22. (A) (B) (C) (D)

23. (A) (B) (C) (D)

24. (A) (B) (C) (D)

25. (A) (B) (C) (D)

26. (A) (B) (C) (D)

27. (A) (B) (C) (D)

28. (A) (B) (C) (D)

29. (A) (B) (C) (D)

30. (A) (B) (C) (D)

31. (A) (B) (C) (D)

32. (A) (B) (C) (D)

33. (A) (B) (C) (D)

34. (A) (B) (C) (D)

35. (A) (B) (C) (D)

36. (A) (B) (C) (D)

37. (A) (B) (C) (D)

38. (A) (B) (C) (D)

39. (A) (B) (C) (D)

40. (A) (B) (C) (D)

### Section - III

41. (A) (B) (C) (D)

42. (A) (B) (C) (D)

43. (A) (B) (C) (D)

44. (A) (B) (C) (D)

45. (A) (B) (C) (D)

46. (A) (B) (C) (D)

47. (A) (B) (C) (D)

48. (A) (B) (C) (D)

49. (A) (B) (C) (D)

50. (A) (B) (C) (D)

For Office Use Only

Section	Mark	Marks Scored
1	x1	
2	x2	
3	x4	
Total		

Remark :



# MENTAL MATHS COMPETITION<sup>®</sup>

Name of Student in Full (IN CAPITAL LETTERS) :-

Name \_\_\_\_\_ Father's Name \_\_\_\_\_ Surname \_\_\_\_\_

School Name \_\_\_\_\_

Std. \_\_\_\_\_ Mobile No. \_\_\_\_\_

Examination Centre \_\_\_\_\_ Date : \_\_\_\_\_

### INSTRUCTIONS

1. Use HB Pencil only on this sheet
2. Darken the ovals fully.
3. Erase completely to change responses.
4. Do not make any stray mark on this sheet.

Incorrect way of shading

(A) (B) (C) (D)

(A) (B) (C) (D)

(A) (B) (C) (D)

Correct way of shading

(A) (B) (C) (D)

## ANSWERS

### Section - I

1. (A) (B) (C) (D)

2. (A) (B) (C) (D)

3. (A) (B) (C) (D)

4. (A) (B) (C) (D)

5. (A) (B) (C) (D)

6. (A) (B) (C) (D)

7. (A) (B) (C) (D)

8. (A) (B) (C) (D)

9. (A) (B) (C) (D)

10. (A) (B) (C) (D)

11. (A) (B) (C) (D)

12. (A) (B) (C) (D)

13. (A) (B) (C) (D)

14. (A) (B) (C) (D)

15. (A) (B) (C) (D)

16. (A) (B) (C) (D)

17. (A) (B) (C) (D)

18. (A) (B) (C) (D)

19. (A) (B) (C) (D)

20. (A) (B) (C) (D)

### Section - II

21. (A) (B) (C) (D)

22. (A) (B) (C) (D)

23. (A) (B) (C) (D)

24. (A) (B) (C) (D)

25. (A) (B) (C) (D)

26. (A) (B) (C) (D)

27. (A) (B) (C) (D)

28. (A) (B) (C) (D)

29. (A) (B) (C) (D)

30. (A) (B) (C) (D)

31. (A) (B) (C) (D)

32. (A) (B) (C) (D)

33. (A) (B) (C) (D)

34. (A) (B) (C) (D)

35. (A) (B) (C) (D)

36. (A) (B) (C) (D)

37. (A) (B) (C) (D)

38. (A) (B) (C) (D)

39. (A) (B) (C) (D)

40. (A) (B) (C) (D)

### Section - III

41. (A) (B) (C) (D)

42. (A) (B) (C) (D)

43. (A) (B) (C) (D)

44. (A) (B) (C) (D)

45. (A) (B) (C) (D)

46. (A) (B) (C) (D)

47. (A) (B) (C) (D)

48. (A) (B) (C) (D)

49. (A) (B) (C) (D)

50. (A) (B) (C) (D)

For Office Use Only

Section	Mark	Marks Scored
1	x1	
2	x2	
3	x4	
Total		

Remark :